
Thank you for choosing to use worksheets and printables from Mama's Learning Corner! I created each of these math activities to use in my home with my own children.

Please download and print these worksheets to use in your own homeschool, co-op or small group. Each worksheet in this set is covered under the copyright of Mama's Learning Corner.

Enjoy!

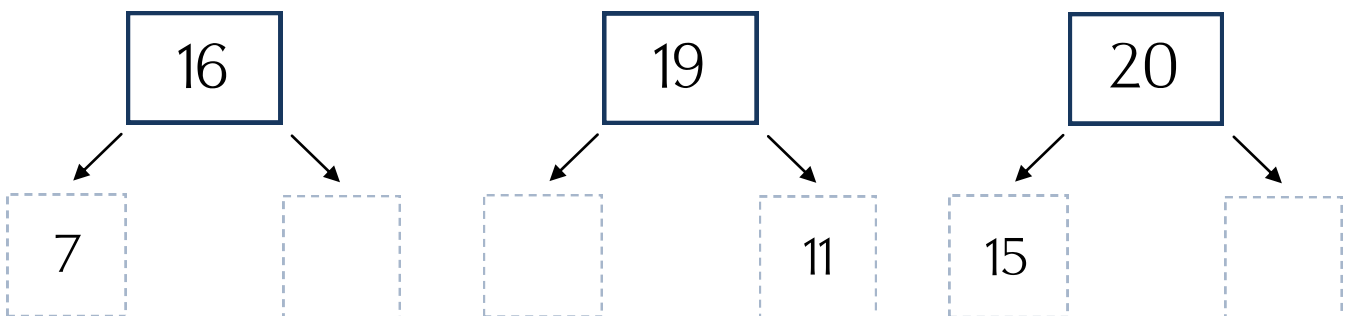
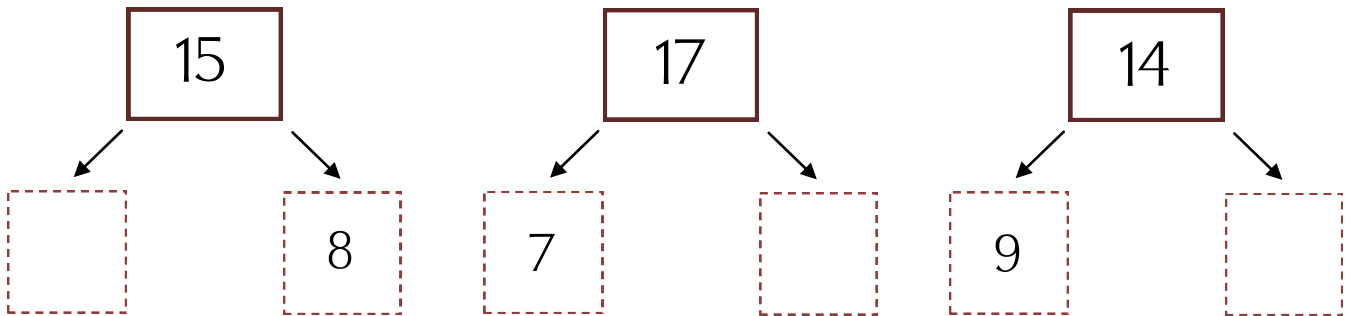
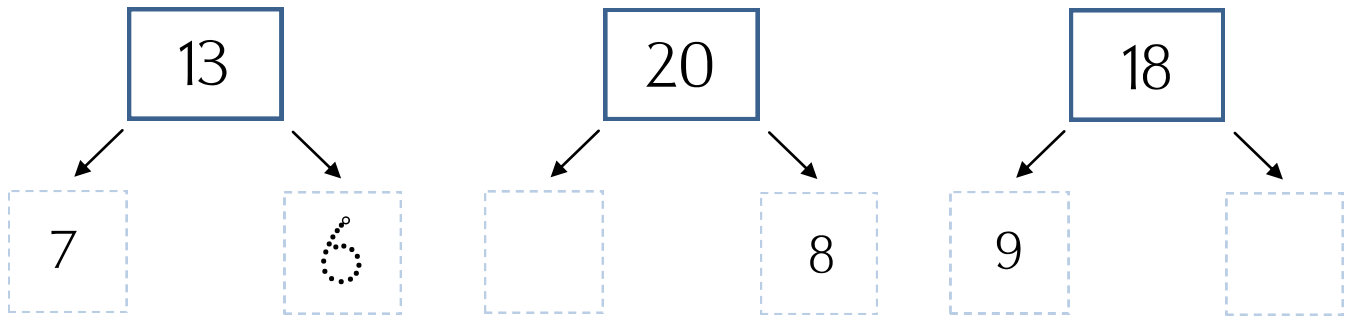
If you choose to download this worksheet set, you must abide by these terms:

- You may download this printable set to your hard drive and then print them from your home computer. You may use them for your own homeschool students, co-op students, or personal home use.
- You must not remove the copyright notice and website address of Mama's Learning Corner at the bottom of the worksheet.
- You may not alter the worksheet or printable item in any way.
- If you share this worksheet set, please link directly to [Mama's Learning Corner](http://www.mamaslearningcorner.com).
- You may not sell or profit from any worksheet in this set from Mama's Learning Corner in any way. For example, you may not print and sell items individually or in a kit.
- You may not host this file on your own site or any type of file-sharing site such as Yahoo! Groups.

Number Bonds: Missing Parts (sums to 20)

Find the missing part of each number bond. Write your answer in the correct box.

Then solve the word problems at the bottom of the page.



Lizzy made 18 cupcakes for her friends. If she gives away 11 cupcakes, how many does she have left?

_____ cupcakes

Tom is 16 years old. Tom's younger brother is 9. How old was Tom when his younger brother was born?

_____ years old

Correct or Incorrect?

Are the following subtraction equations correct or incorrect?

If the equation is **correct**, put a check in the 'yes' box. If the equation is **not correct** put a check in the 'no' box.

$100 - 50 = 50$	<input type="checkbox"/> yes <input type="checkbox"/> no
$60 - 30 = 40$	<input type="checkbox"/> yes <input type="checkbox"/> no
$95 - 5 = 90$	<input type="checkbox"/> yes <input type="checkbox"/> no
$200 - 100 = 10$	<input type="checkbox"/> yes <input type="checkbox"/> no
$530 - 30 = 100$	<input type="checkbox"/> yes <input type="checkbox"/> no
$50 - 25 = 25$	<input type="checkbox"/> yes <input type="checkbox"/> no

$90 - 50 = 40$	<input type="checkbox"/> yes <input type="checkbox"/> no
$100 - 90 = 10$	<input type="checkbox"/> yes <input type="checkbox"/> no
$55 - 5 = 60$	<input type="checkbox"/> yes <input type="checkbox"/> no
$200 - 100 = 10$	<input type="checkbox"/> yes <input type="checkbox"/> no
$40 - 20 = 20$	<input type="checkbox"/> yes <input type="checkbox"/> no
$100 - 25 = 75$	<input type="checkbox"/> yes <input type="checkbox"/> no

$$\begin{array}{r} 350 \\ - 50 \\ \hline \end{array}$$

$$\begin{array}{r} 75 \\ - 25 \\ \hline \end{array}$$

$$\begin{array}{r} 440 \\ - 30 \\ \hline \end{array}$$

Subtraction Word Problems

Read each word problem carefully. After solving the equation, write your answer on the line.

Mary needs to save \$250 to go on a trip. She already has \$100.

How much more money does Mary need to save to reach her goal?

_____ dollars

You have 60 minutes to complete your math, spelling, and history work. You spend 40 minutes on math and spelling.

How many minutes do you have left to finish your history assignment?

_____ minutes

It takes John 15 minutes to walk one mile.

If John walks for 30 minutes, how many miles has he walked?

_____ miles

A loaf of bread has 25 slices. Mom makes sandwiches for lunch and uses 10 slices of bread.

How many slices of bread are left in the loaf?

_____ slices

Subtraction Ladders

Solve the Subtraction Ladders below. Start by solving the equation at the top of the ladder and write your answer in the shaded box below it. Then use your answer to solve the next equation.

Solve your way down to the bottom of the ladder!

19	20	15	18
- 4	- 10	- 4	- 2
- 5	- 2	- 3	- 9
- 3	- 3	- 6	- 3
- 5	- 1	- 2	- 2